

Welcome!

Hello everyone, and thank you for enrolling in AP Human Geography!

Have you ever looked at the world and asked, “Why?” This course offers the answers to all of those “why” questions. APHUG will make you a well-informed, global citizen. You will gain a lot of insight regarding how the world operates and how that impacts your life as a result. For more info about the course, visit the class website: <https://dolender5.wixsite.com/olenderaphug>



This summer assignment is the first step in this process. I don't give “busy” work so I hope you're not viewing the assignment in that way. The goal of the assignment is to prepare you for the course by exposing you to themes and concepts that will be utilized throughout the year.

Requirements

- Type ALL responses (except maps)
- Use 12 point font and double space
- Hand assignment in on your first day of class
- If you have any issues or questions, you need to clarify BEFORE the due date
 - My email: dolender@teaneckschools.org
- Please submit Assignment 1 to the APHUG Google Classroom (code to join: **pb6apoc**) by Sunday, September 6th at 11:59 pm.
- For Assignment 2, all maps should be turned in directly to me during our first class.

Assignment 1: APHUG Topic Introduction

Please choose 2 of the 6 videos listed to watch and complete the response template given below for EACH one you watch. The videos cover a variety of topics that we will look into further this year.

TED Talk, “Global population growth, box by box,” 2010: <https://bit.ly/2M59MhJ>

TED Talk, “Refugees want empowerment, not handouts,” 2017: <https://bit.ly/2EMAYLR>

TED Talk, “The Great Migration and the power of a single decision,” 2017: <https://bit.ly/2sLziic>

TED Talk, “3 myths about the future of work,” 2017: <https://bit.ly/2GAW9EE>

TED Talk, “How Pakistani women are taking the internet back,” 2017: <https://bit.ly/2LF9Kgk>

TED Talk, “Is the world getting better or worse? A look at the numbers,” 2018: <https://bit.ly/2JFfxAG>

- Write a one paragraph (5-7 sentences) summary of the information discussed in the video.
- Write two questions you have about the issue after watching the video.
- Brainstorm: consider how the issues discussed in the video will impact the major themes we will cover this year. Respond in 2-3 sentences for EACH of the four categories listed on the next page. I've given you some ideas to guide your thinking for each theme. **You don't have to answer those questions specifically** (some may not apply to a video), it's just to help you understand what I'm looking for.

- Political
 - What rights do people have? What rights are being denied?
 - How does the government deal with this issue?
 - Are laws or people's political viewpoints affected?
 - Economic
 - What are the costs associated with the issue?
 - Are there financial burdens?
 - If spending is focused on this issue, what is money then NOT going toward?
 - Socio-cultural
 - How are people representing their culture?
 - Is there tension or harmony happening between different groups?
 - Is anyone's culture at risk?
 - Environmental
 - How are people using their surrounding space?
 - Are people affecting the environment more or is the environment affecting the people more?
 - Is there conflict over a space? Why?
-

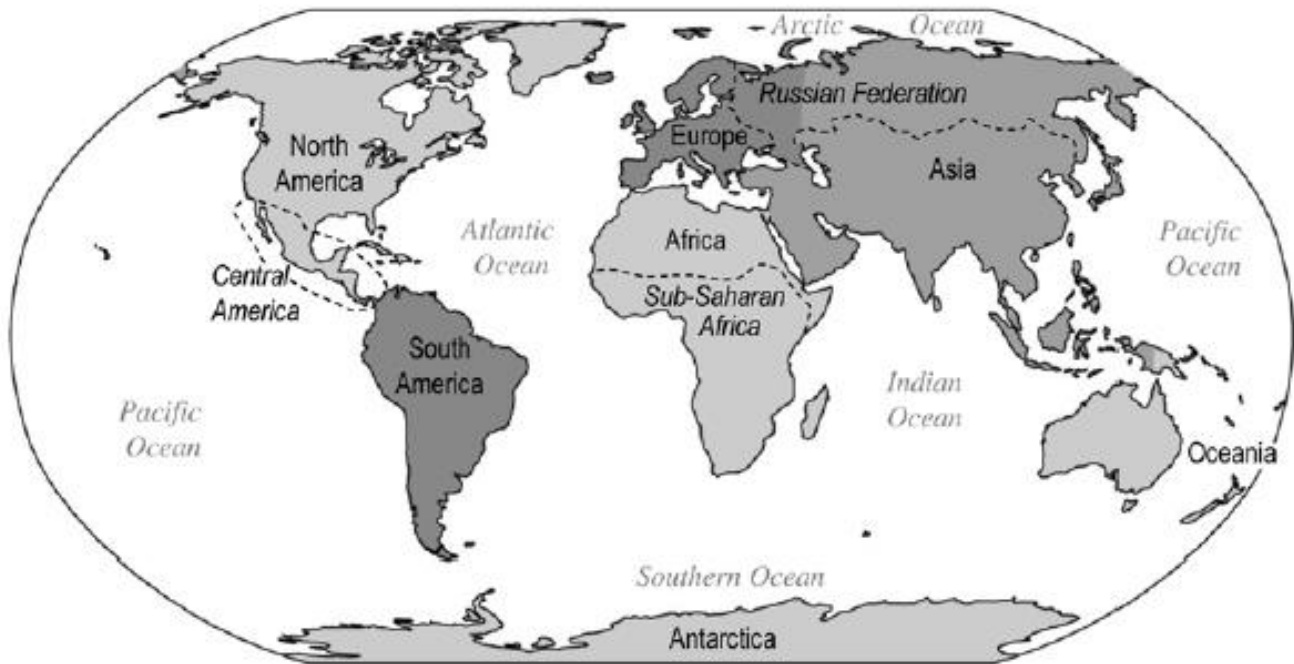
Assignment 3: Map Labeling

Please label each of the given maps on the following pages. This is **CRITICALLY** important to your ability to do well in the class this year. You only have to label what is listed next to each map. Be sure to write neatly because you will need to refer to these maps throughout the year for assignments and quizzes.

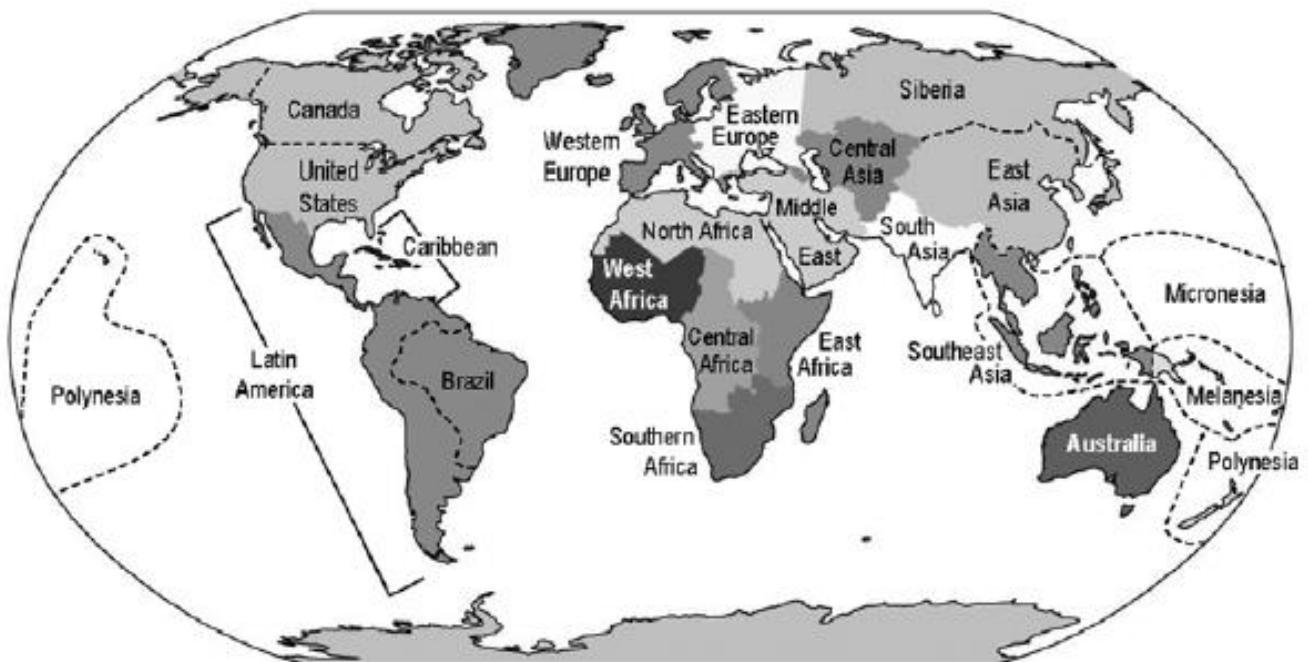
Using color is not mandatory (except for maps 13 and 14), but color-coding can work as a useful study tool going forward. You can label each map by searching for a map of the given region, or using Google Maps and moving around to the respective places on the globe. Items that are bolded are emphasized in the course and items in italics are cities.

Nothing to fill out here, this is just for your reference as we will offer refer to parts of the world on a regional scale.

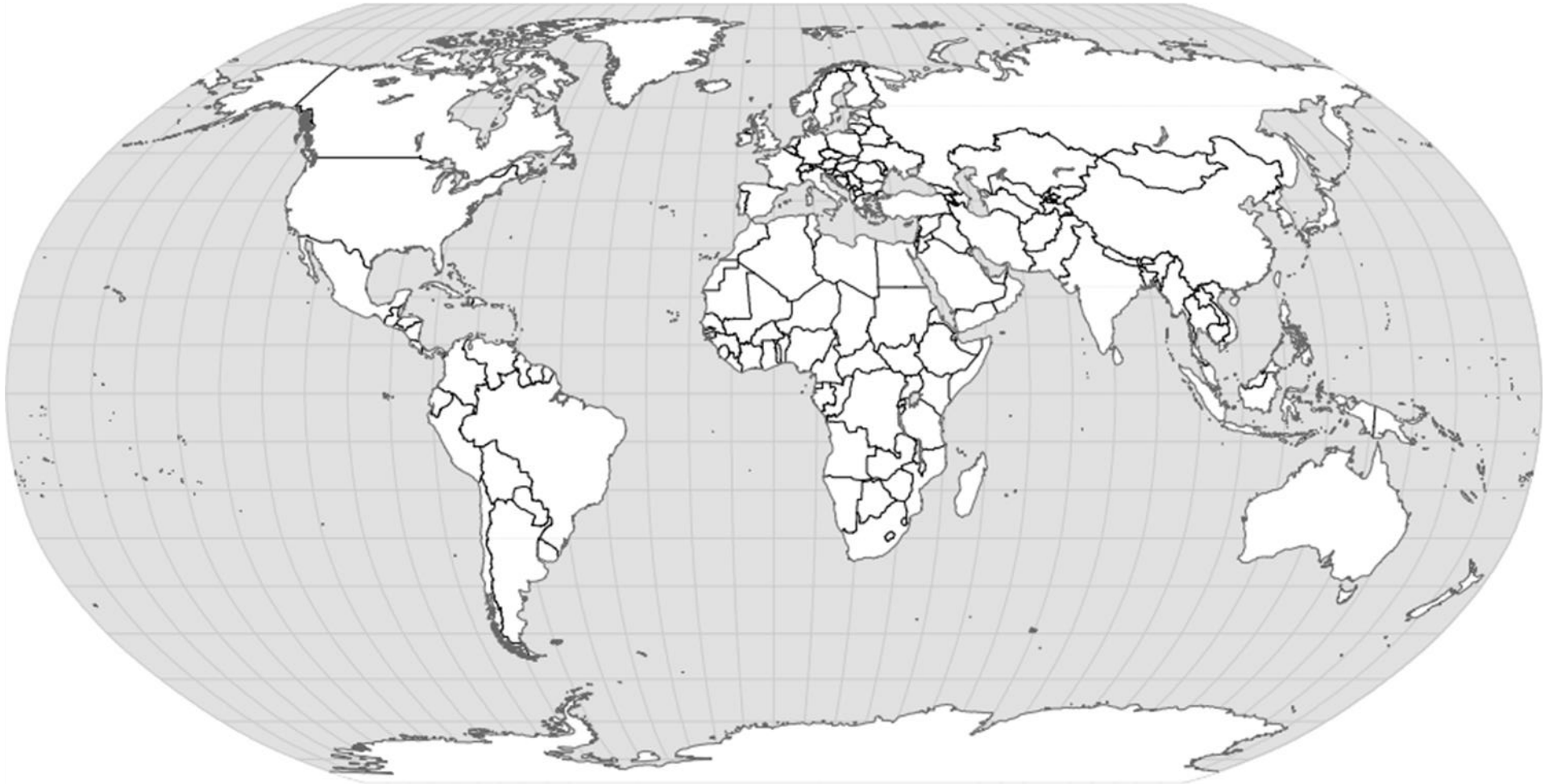
AP Human Geography: World Regions — A Big Picture View



AP Human Geography: World Regions — A Closer Look



Map 1: Basics

**Label the following:**

5 Oceans
Arctic Circle

7 Continents
Antarctic Circle

Tropic of Cancer
Prime Meridian

Equator
International Date Line

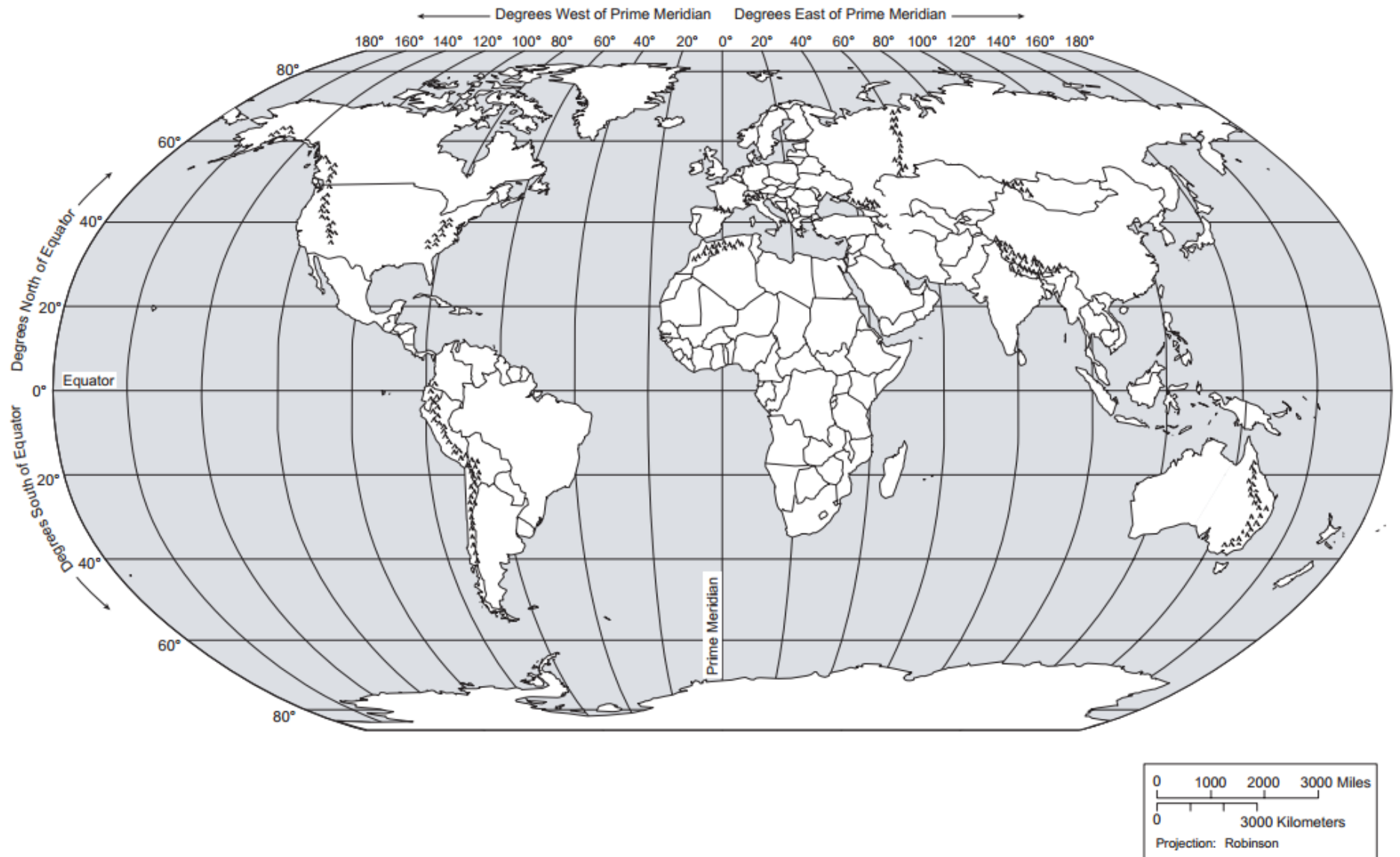
Tropic of Capricorn
Southern Ocean

After labeling Map 1, complete the following sentences:

Lines of latitude run from _____ to _____ and measure distances _____ and _____ of the _____.

Lines of longitude run from _____ to _____ and measure distances _____ and _____ of the _____.

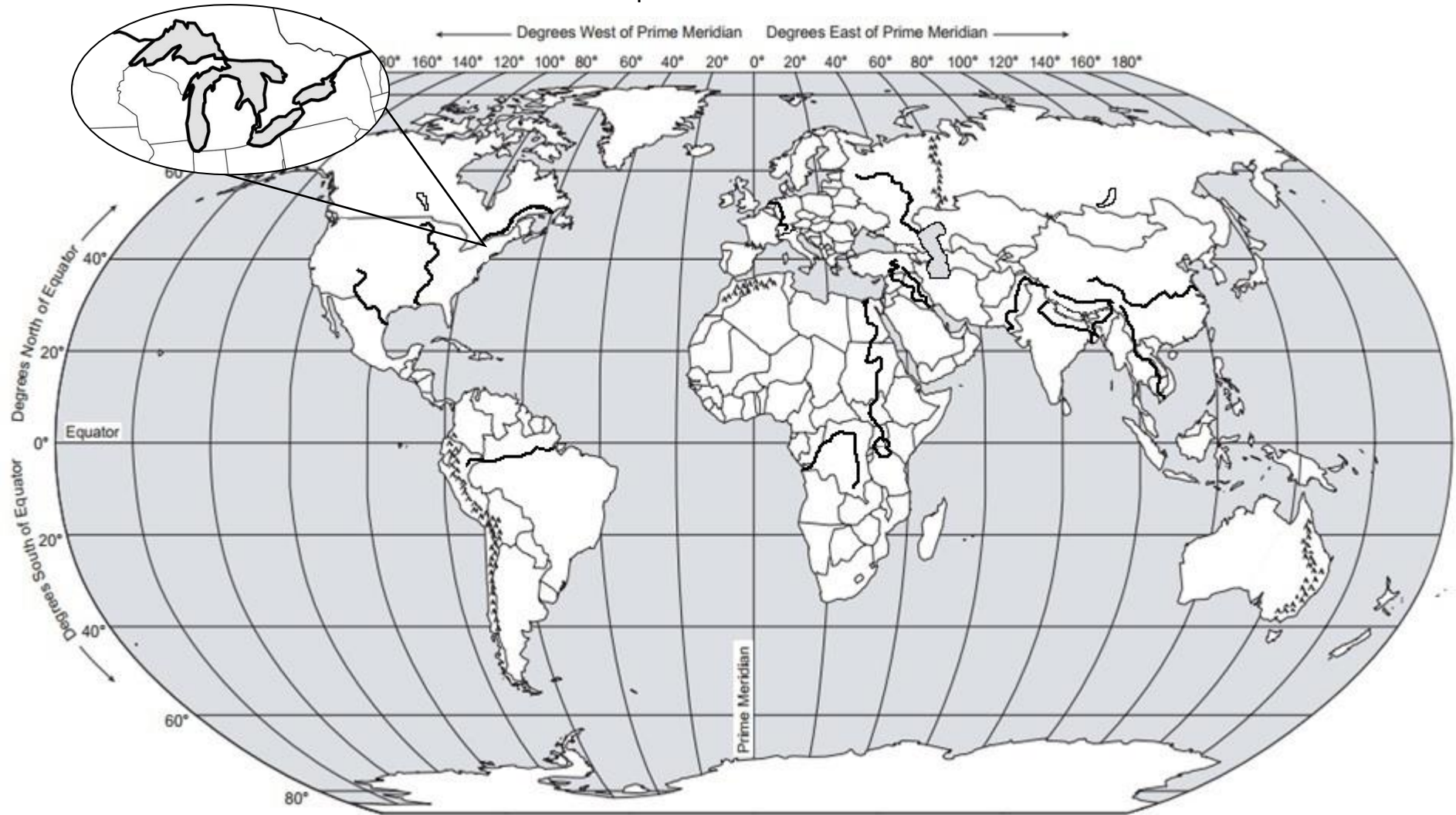
Map 2: Land Features



Label the following:

- | | | | | |
|--------------|-----------------|------------|------------------|--------------|
| 1. Rockies | 4. Appalachians | 7. Sahara | 10. Urals | 13. Kalahari |
| 2. Himalayas | 5. Caucasus | 8. Alps | 11. Rub al Khali | 14. Namib |
| 3. Gobi | 6. Andes | 9. Atacama | 12. Patagonia | |

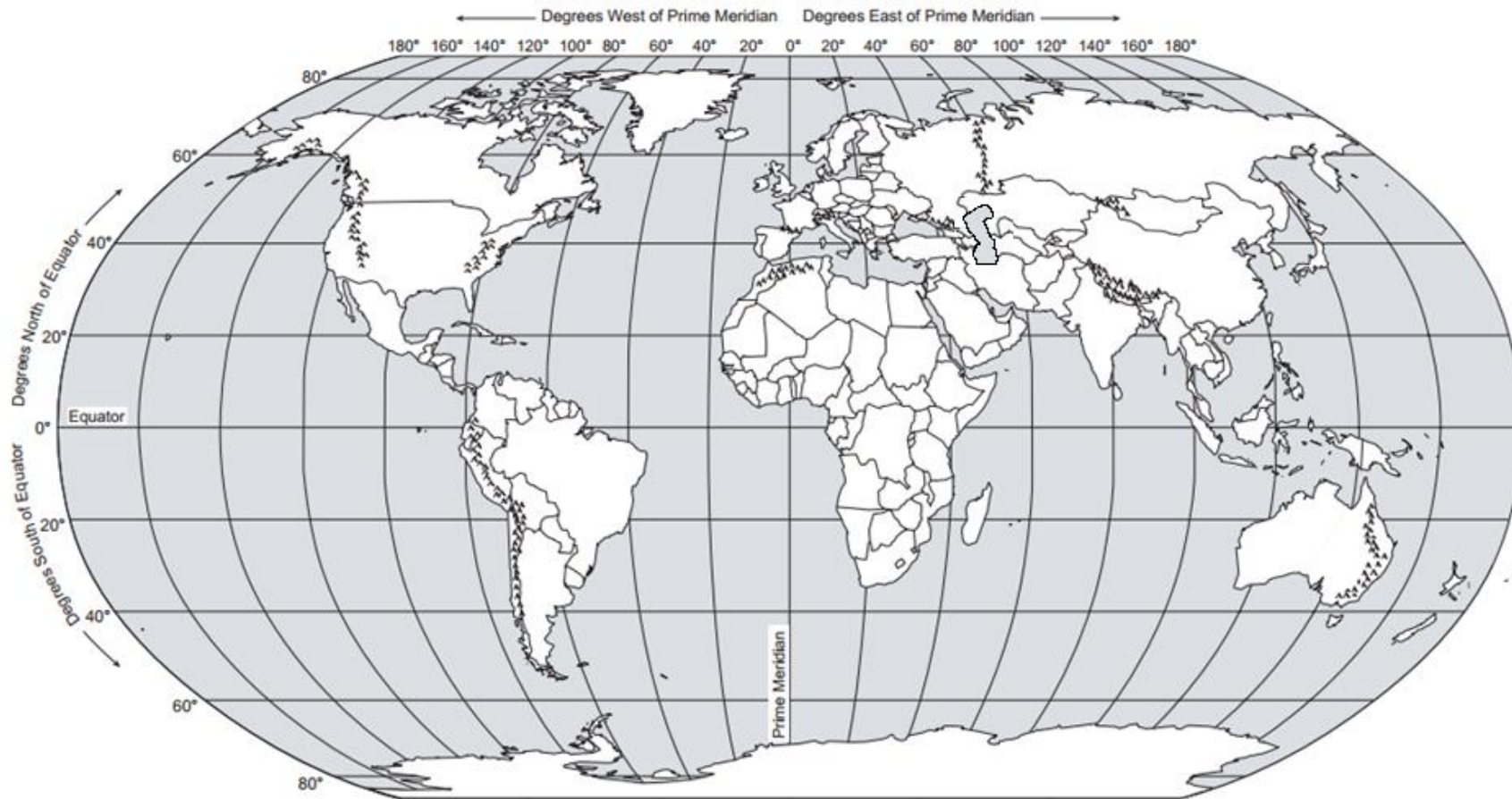
Map 3: Rivers and Lakes



Label the following:

- | | | | | |
|----------------------|----------------------|-------------------|-------------------|------------------------|
| 1. Brahmaputra River | 6. Mississippi River | 11. Ganges River | 16. Lake Superior | 21. Rio Grande River |
| 2. Tigris River | 7. Indus River | 12. Congo River | 17. Lake Michigan | 22. Lake Baikal |
| 3. Euphrates River | 8. Mekong River | 13. Volga River | 18. Lake Erie | 23. St. Lawrence River |
| 4. Yangtze River | 9. Amazon River | 14. Lake Winnipeg | 19. Lake Ontario | |
| 5. Nile River | 10. Lake Victoria | 15. Rhine River | 20. Lake Huron | |

Map 4: Seas, Gulfs, and other Major Water Features

**Label the following:**

- | | | | | |
|----------------------|--------------------|------------------------|-------------------------|---------------------|
| 1. Caspian Sea | 5. South China Sea | 9. Gulf of Aden | 13. Strait of Malacca | 17. English Channel |
| 2. Mediterranean Sea | 6. Caribbean Sea | 10. Strait of Hormuz | 14. Mandeb Strait | |
| 3. Red Sea | 7. Gulf of Mexico | 11. Dardanelles Strait | 15. Strait of Gibraltar | |
| 4. Aral Sea | 8. Persian Gulf | 12. Bosporus Strait | 16. Panama Canal | |

Map 5: North America and the Caribbean



Label the following:

- | | | | | |
|------------------------|-----------------|------------------------|-----------------|-------------------|
| 1. Bahamas | 6. Cuba | 11. Dominican Republic | 16. Haiti | 21. Jamaica |
| 2. Trinidad and Tobago | 7. Belize | 12. Costa Rica | 17. El Salvador | 22. Guatemala |
| 3. Honduras | 8. Mexico | 13. Nicaragua | 18. Panama | 23. Canada |
| 4. United States | 9. Greenland | 14. Chicago | 19. Havana | 24. Los Angeles |
| 5. Barbados | 10. Mexico City | 15. Ontario | 20. Quebec | 25. Washington DC |

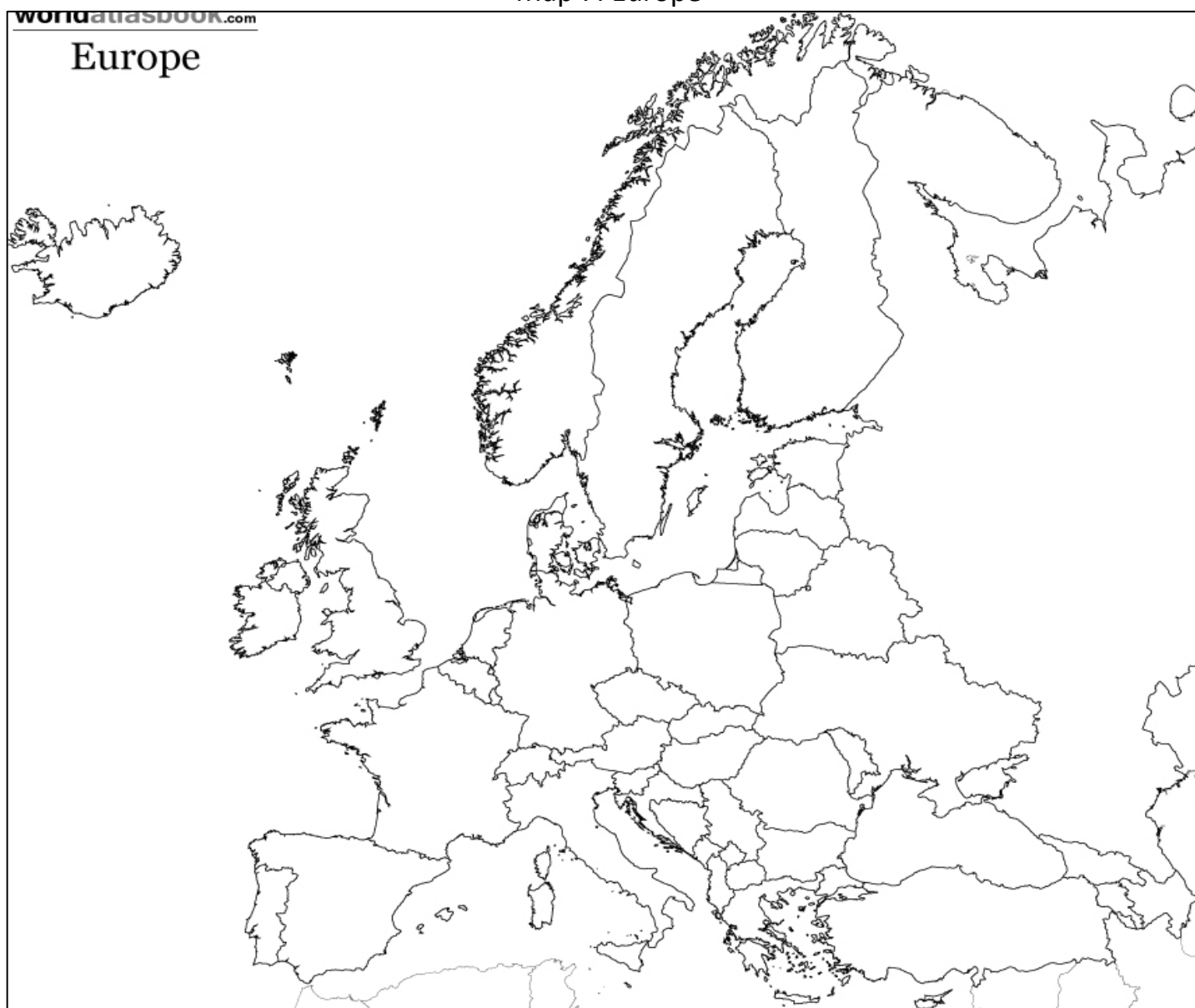
Map 6: South America



Label the following:

- | | | | | |
|--------------|-------------------|---------------|-------------------|--------------|
| 1. Argentina | 6. Colombia | 11. Uruguay | 16. French Guiana | 21. Lima |
| 2. Ecuador | 7. Paraguay | 12. Chile | 17. Buenos Aires | 22. Brasília |
| 3. Peru | 8. Venezuela | 13. São Paulo | 18. Bolivia | 23. Guyana |
| 4. Caracas | 9. Rio de Janeiro | 14. Suriname | 19. Brasil | 24. Bogota |

Map 7: Europe



Label the following:

1. *The Hague*
2. *Rome*
3. *Moscow*
4. *London*
5. *St. Petersburg*
6. *Brussels*
7. *Paris*
8. *Madrid*
9. *Berlin*
10. Switzerland
11. Netherlands
12. Bulgaria
13. Romania
14. Luxembourg
15. **Germany**
16. **France**
17. Belgium
18. Austria
19. **Spain**
20. **Slovenia**
21. **Serbia**
22. San Marino
23. Portugal
24. Montenegro
25. Sweden
26. Macedonia
27. **Italy**
28. **Vatican City**
29. **Greece**
30. **Croatia**
31. **Bosnia and Herzegovina**
32. **Denmark**
33. **Czech Republic**
34. Belarus
35. **Poland**

36. **Ireland**

41. Lithuania

46. **Russia**

51. Ukraine

53. Estonia

55. Norway

37. Hungary

42. Latvia

47. Slovakia

52. **United Kingdom**

54. Finland

56. Iceland

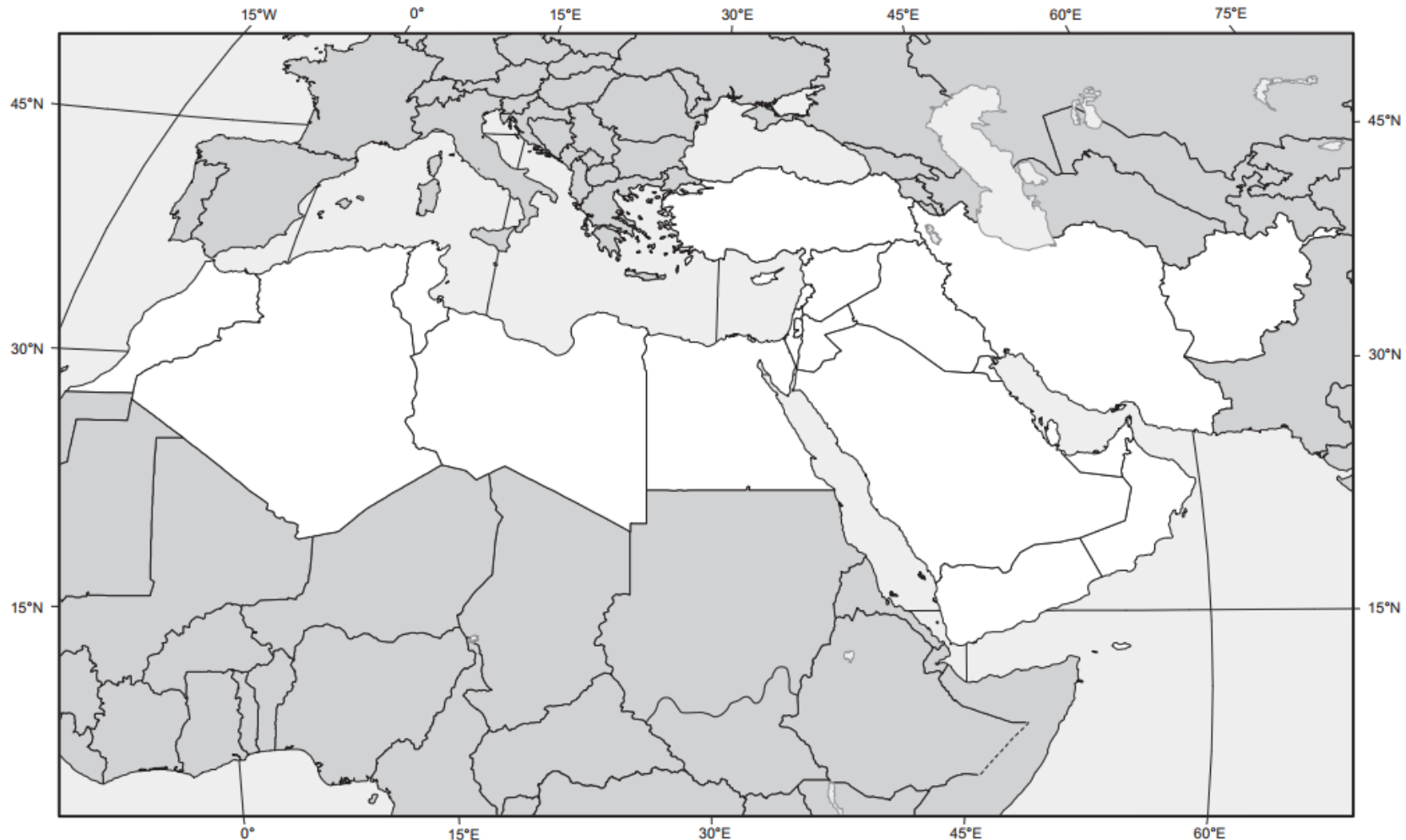
Map 8: Sub-Saharan Africa



Label the following:

- | | | | | |
|-----------------|-----------------|------------------|-------------------|-------------------------|
| 1. Burundi | 10. Addis Ababa | 19. Liberia | 28. South Africa | 37. Central Afr. Repub. |
| 2. Madagascar | 11. Mogadishu | 20. Senegal | 29. Côte d'Ivoire | 38. Ghana |
| 3. Somalia | 12. Djibouti | 21. Cape Town | 30. Mali | 39. Swaziland |
| 4. Zimbabwe | 13. Botswana | 22. Johannesburg | 31. Sierra Leone | 40. Gambia |
| 5. Congo | 14. South Sudan | 23. Eritrea | 32. Lagos | 41. Mauritania |
| 6. Lesotho | 15. Angola | 24. Chad | 33. Accra | 42. Dem. Rep. of Congo |
| 7. Burkina Faso | 16. Togo | 25. Uganda | 34. Ethiopia | 43. Nairobi |
| 8. Benin | 17. Namibia | 26. Cameroon | 35. Rwanda | 44. Kenya |
| 9. Nigeria | 18. Cape Verde | 27. Zambia | 36. Tanzania | 45. Niger |

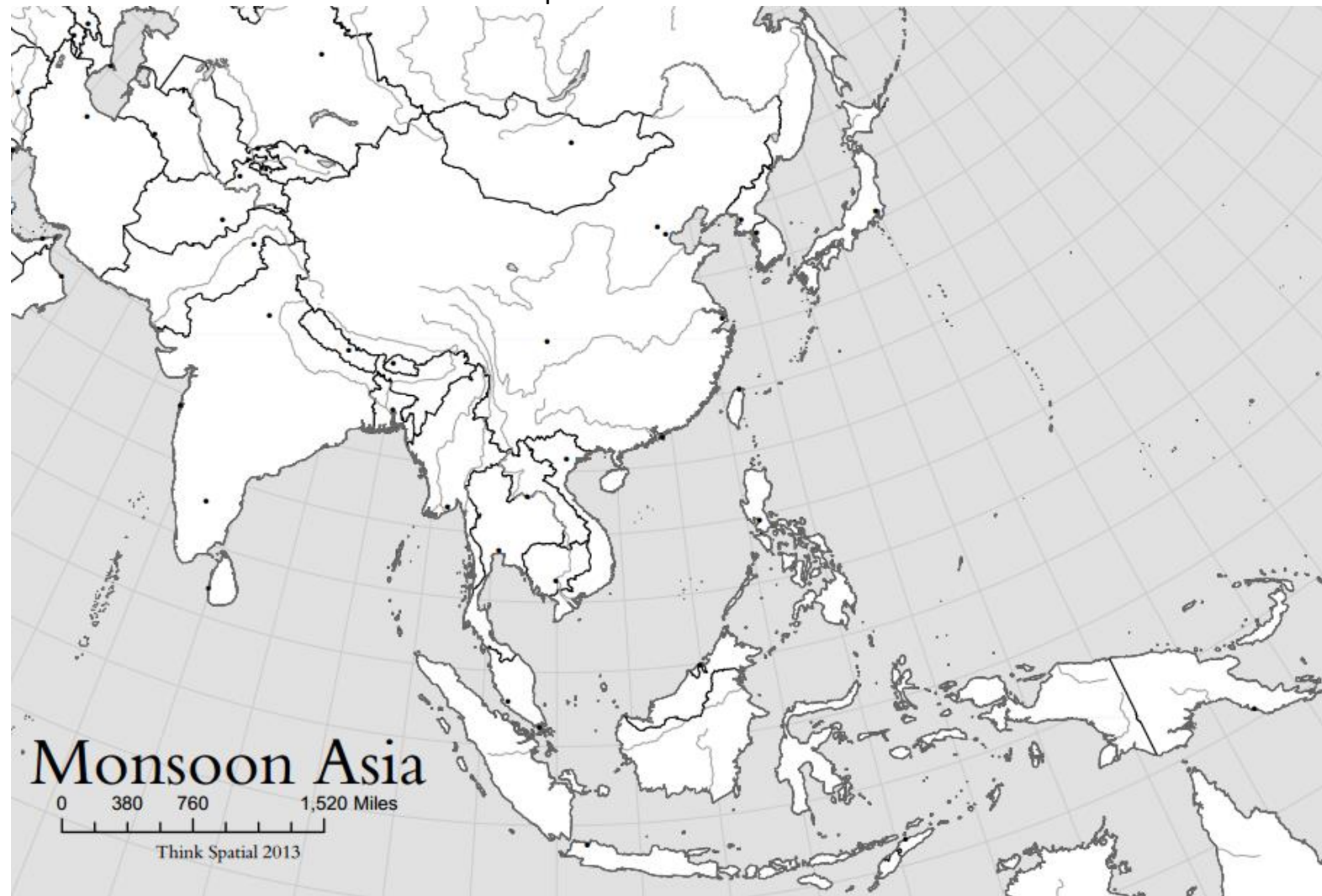
Map 9: North Africa and the Middle East



Label the following:

- | | | | | |
|------------------|-------------------|---------------------------------|----------------------|-------------------------|
| 1. Algeria | 8. Egypt | 15. Libya | 22. Morocco | 29. Sudan |
| 2. Tunisia | 9. Armenia | 16. Azerbaijan | 23. Jerusalem | 30. Cyprus |
| 3. Georgia | 10. Iraq | 17. Israel | 24. Jordan | 31. Kuwait |
| 4. Lebanon | 11. Oman | 18. Palestine | 25. Qatar | 32. Saudi Arabia |
| 5. Syria | 12. Turkey | 19. United Arab Emirates | 26. Yemen | 33. Baghdad |
| 6. Beirut | 13. Cairo | 20. Damascus | 27. Istanbul | 34. Iran |
| 7. Tehran | 14. Tripoli | 21. Mecca | 28. Medina | 35. Afghanistan |

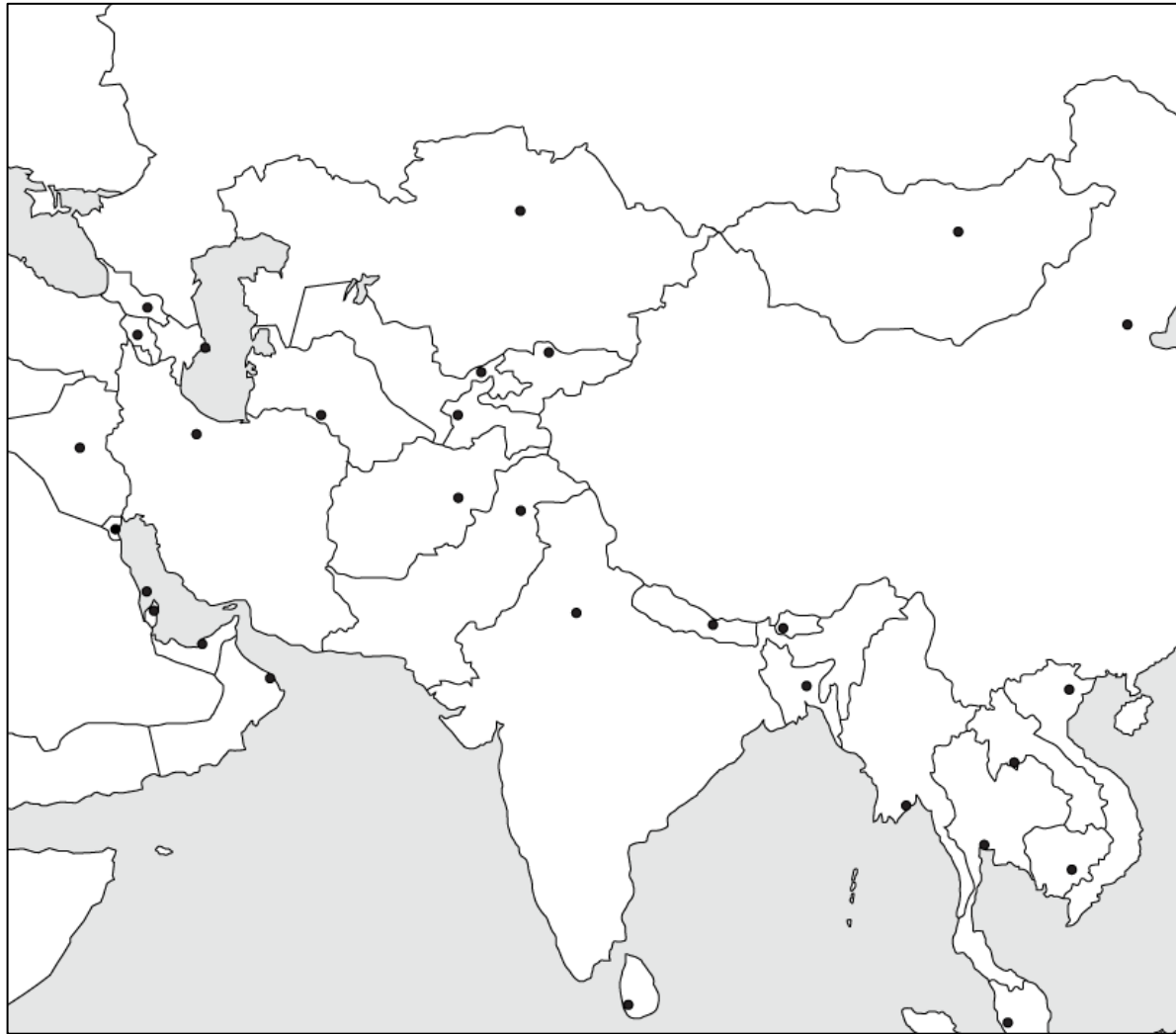
Map 10: East and Southeast Asia



Label the following:

- | | | | | |
|--------------|-----------------|---------------|---------------------|-----------------|
| 1. Tokyo | 6. Jakarta | 11. Vietnam | 16. Philippines | 21. North Korea |
| 2. Shanghai | 7. Japan | 12. Hong Kong | 17. Myanmar (Burma) | 22. Cambodia |
| 3. Seoul | 8. Beijing | 13. Thailand | 18. China | 23. Brunei |
| 4. Pyongyang | 9. Bangkok | 14. Singapore | 19. Laos | 24. Mongolia |
| 5. Taiwan | 10. Timor-Leste | 15. Malaysia | 20. South Korea | 25. Indonesia |

Map 11: Central and South Asia

**Label the following:**

1. Sri Lanka
2. Bhutan
3. Kyrgyzstan

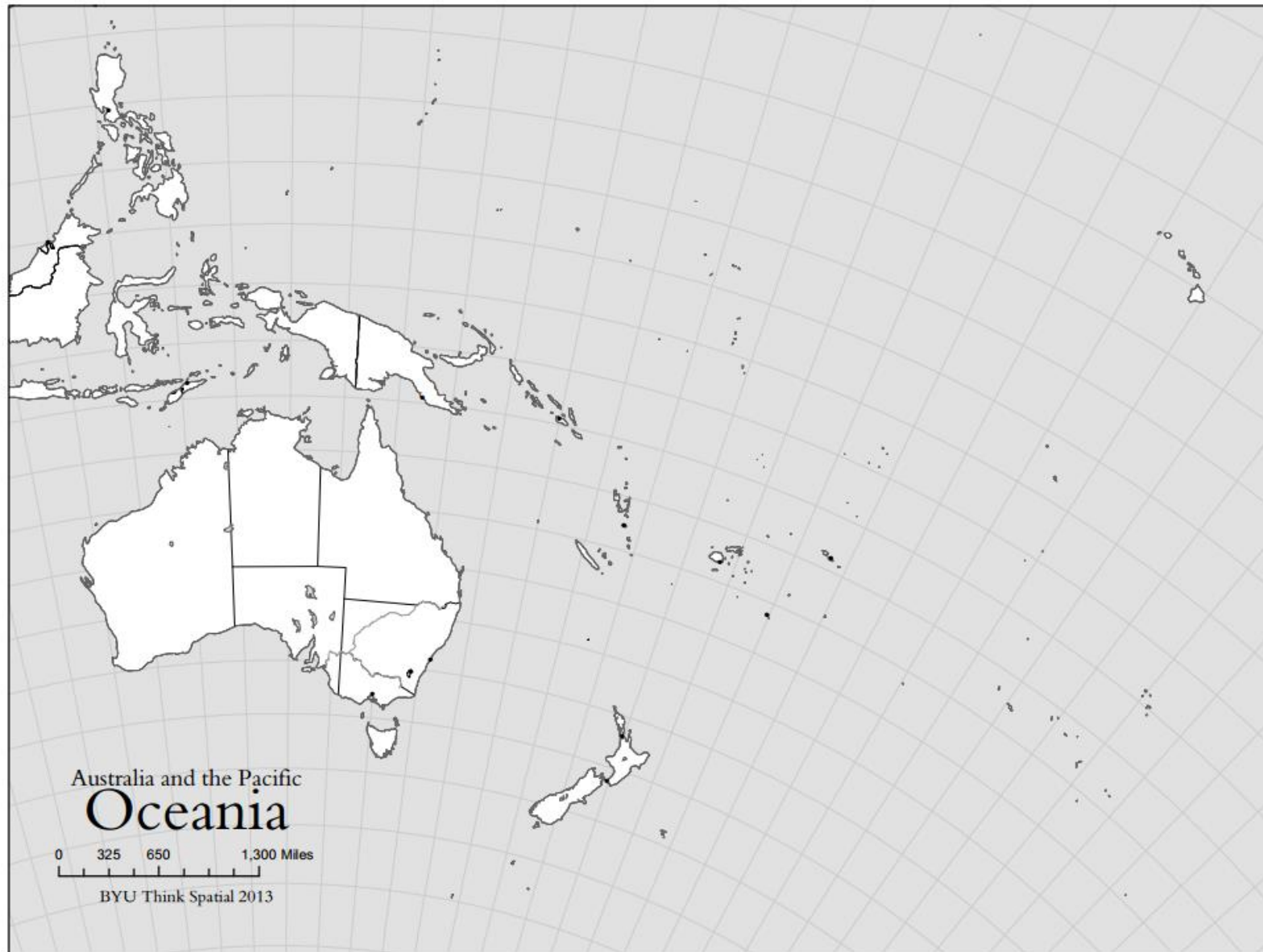
4. Pakistan
5. Bangladesh
6. Tajikistan

7. Nepal
8. Kashmir
9. Turkmenistan

10. Maldives
11. Kazakhstan
12. *Calcutta*

13. India
14. Uzbekistan
15. *New Delhi*

Map 12: Oceania



Label the following and draw a circle around Micronesia, Melanesia, and Polynesia.

1. Sydney

3. Auckland

5. New Zealand

7. Polynesia

9. Papua New Guinea

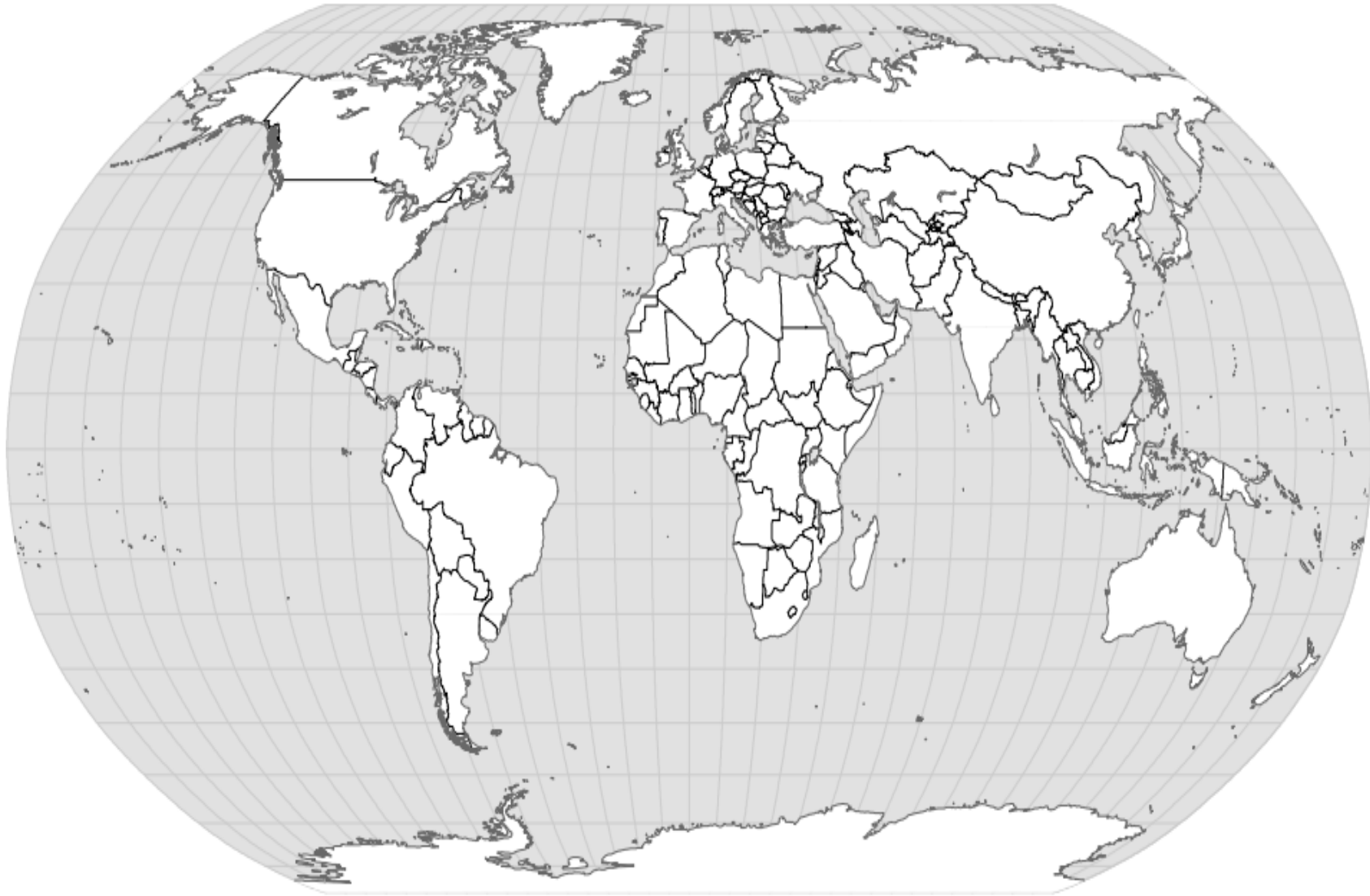
2. Melbourne

4. Australia

6. Micronesia

8. Melanesia

Map 13: World Regions (Big Picture)



This map will be colored based on region not state (country). Each REGION must be a single color. Draw a circle around Central America, Sub-Saharan Africa, and the Russian Federation. Use the sample map provided to help you.

1. North America

3. Africa

5. Central America

7. Sub-Saharan Africa

9. South America

2. Asia

4. Europe

6. Oceania

8. Russian Federation

10. Antarctica

Map 14: World Regions (Closer Look)

This map will be colored based on region not state (country). Each REGION must be a single color. Draw a circle around Eastern Europe, East Asia, SE Asia, and S Asia. Bracket the Caribbean and Latin America. Use the sample map provided to help you.

- | | | | | |
|-------------------|-------------------|--------------------|----------------------------------|------------------|
| 1. Latin America | 4. Western Europe | 7. Eastern Europe | 10. North Africa and Middle East | 13. West Africa |
| 2. Central Africa | 5. East Africa | 8. Southern Africa | 11. Siberia | 14. Central Asia |
| 3. South Asia | 6. East Asia | 9. Southeast Asia | 12. Australia | 15. Antarctica |